



INDIAN SCHOOL AL WADI AL KABIR

DEPARTMENT OF EVS [2023 – 2024]

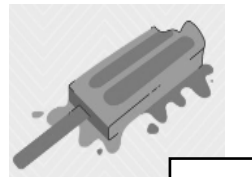
LESSON: THINGS AROUND US
RESOURCE PERSON: MS. LUBNA IMRAN

WORKSHEET-1

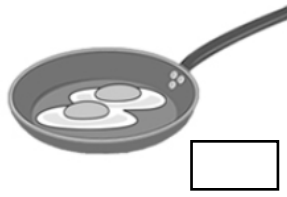
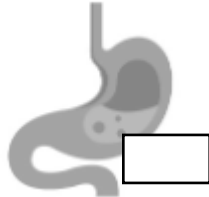
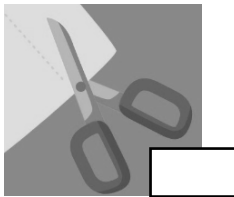
NAME: _____ CLASS: IV SEC: _____ DATE: _____

I. Do as directed.


1. Tick the pictures that show a physical change.



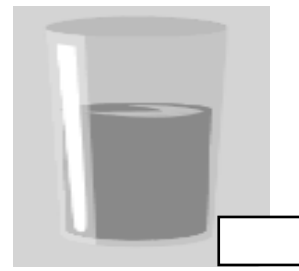
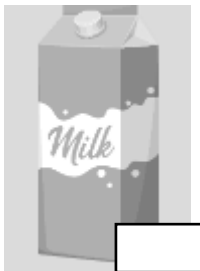
2. Tick the pictures that show a chemical change.



3. Colour the items that are found in the environment in a gaseous state.



4. Tick the items that are found as liquids in our environment.



II. Match the following.

Column A	Column B
1. Microscope	a. Gases have no definite shape and no definite volume.
2. Fragrance of a flower	b. A chemical change as the nature of the molecules of the substance changes.
3. Formation of curd	c. It exists in all 3 states of matter in nature.
4. Water	d. An instrument used to see molecules.

1. _____ 2. _____ 3. _____ 4. _____

III. Give reasons for the following statements.

1. The juice poured into a glass, takes the shape of the glass.

Ans: _____

2. When a candle burns, both physical and chemical changes take place.

Ans: _____

IV. Complete the given relationship and fill in the blanks suitably.

1. burning of wood : chemical change :: tearing of paper : _____

2. solvent : water :: _____ : turmeric powder

3. gases: no definite volume :: solids: _____

4. solids: very closely packed molecules :: _____ : very loosely packed molecules